


## Subtraction facts to 5



$$5 \text{ horses} - 2 \text{ horses} = \underline{3 \text{ horses}}$$



$$2 \text{ mice} - 1 \text{ mouse}$$



$$= \underline{\hspace{2cm}}$$



$$5 \text{ birds} - 4 \text{ birds} = \underline{\hspace{2cm}}$$

