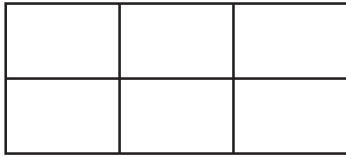


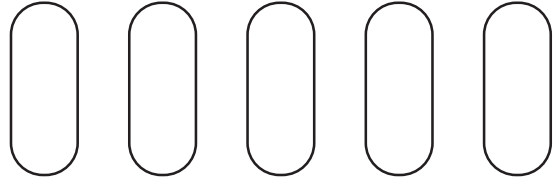
Name _____

①



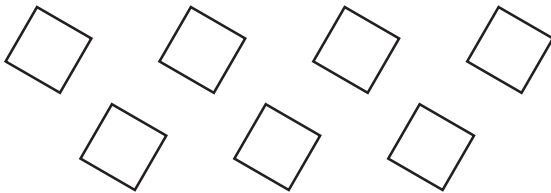
$\frac{4}{6}$ are shaded.

②



Put an "X" on $\frac{1}{5}$ of the group.

③




Put an "X" on $\frac{5}{7}$ of the group.

④



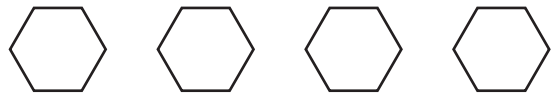
$\frac{2}{2}$ are shaded.

⑤



$\frac{1}{3}$ are shaded.

⑥



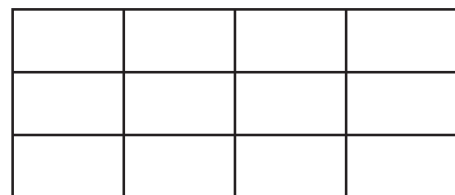
Put an "X" on $\frac{0}{4}$ of the group.

⑦



Put an "X" on $\frac{5}{5}$ of the group.

⑧



$\frac{10}{12}$ are shaded.