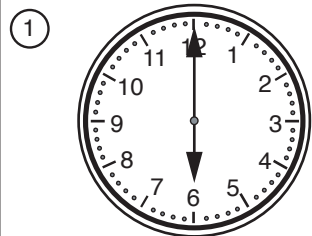


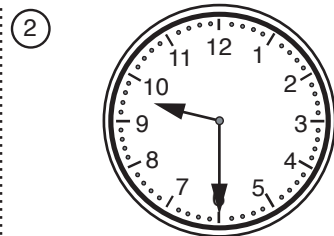
Telling time to the minute and half past the hour

The shorter clock hand points to the hour numerals. The longer hand points to the minute marks. The hour numerals are 5 minutes apart. On a digital clock, the hours and minute numerals are often separated by a colon symbol :



It is 6 o'clock

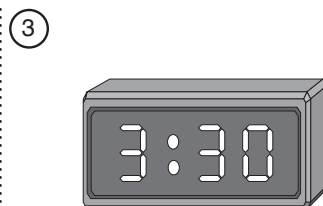
It is 6 : 00.



It is half past

9 o'clock

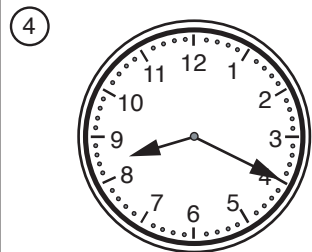
It is 9 : 30.



It is half past

3 o'clock


It is 3 : 30.



It is 20 minutes

after 8 o'clock


It is 8 : 20.



It is 34 minutes

after 5 o'clock.


It is 5 : 34.



It is 7 minutes


after 4 o'clock

It is 4 : 07.



It is

2 : 25.



It is

6 : 14.

① 8:39

$$\begin{array}{r} 2:25 \\ + 6:14 \\ \hline 8:39 \end{array}$$

A 77

$$\begin{array}{r} 34 \\ + 2 \\ \hline 36 \end{array}$$

$$\begin{array}{r} 21 \\ + 20 \\ \hline 41 \end{array}$$

$$\begin{array}{r} 36 \\ + 41 \\ \hline 77 \end{array}$$

2 ones, 3 tens
and 5 hundreds

$$\begin{array}{r} 532 \\ \hline \end{array}$$

2 tens, 4 ones
and 1 hundred

$$\begin{array}{r} 124 \\ \hline \end{array}$$

B 656

$$\begin{array}{r} 532 \\ + 124 \\ \hline 656 \end{array}$$

C 358

$$\begin{array}{r} 9 \\ + 9 \\ \hline 18 \end{array}$$

$$\begin{array}{r} 346 \\ - 6 \\ \hline 340 \end{array}$$

$$\begin{array}{r} 18 \\ + 340 \\ \hline 358 \end{array}$$

$$\begin{array}{r} 10 \\ - 7 \\ \hline 3 \end{array}$$

$$\begin{array}{r} 214 \\ + 120 \\ \hline 334 \end{array}$$

D 337

$$\begin{array}{r} 3 \\ + 334 \\ \hline 337 \end{array}$$

E 65

$$\begin{array}{r} 7 \\ + 7 \\ \hline 14 \end{array}$$

$$\begin{array}{r} 79 \\ - 28 \\ \hline 51 \end{array}$$

$$\begin{array}{r} 14 \\ + 51 \\ \hline 65 \end{array}$$

Marie is eighteenth in line.

17 people are ahead of

her.

Subtract sixty-four
from ninety-four.

$$\begin{array}{r} 94 \\ - 64 \\ \hline 30 \end{array}$$

$$\begin{array}{r} 30 \\ \hline \end{array}$$

F 47

$$\begin{array}{r} 17 \\ + 30 \\ \hline 47 \end{array}$$

What number is thirty
less than sixty-eight?

$$\begin{array}{r} 68 \\ - 30 \\ \hline 38 \end{array}$$

$$\begin{array}{r} 38 \\ \hline \end{array}$$

What number is eighteen
more than twenty-two?

$$\begin{array}{r} 22 \\ + 18 \\ \hline 40 \end{array}$$

$$\begin{array}{r} 40 \\ \hline \end{array}$$

G 78

$$\begin{array}{r} 38 \\ + 40 \\ \hline 78 \end{array}$$